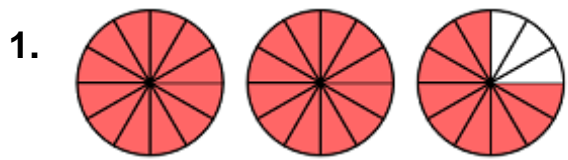


# 1. Rename Mixed to Fractions with Circles

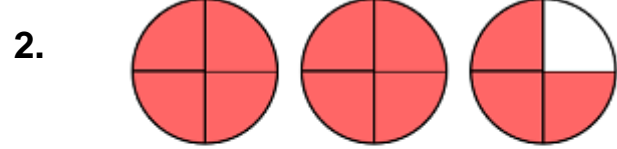
Name \_\_\_\_\_

Complete the number sentence to show the fraction form from the pictures:



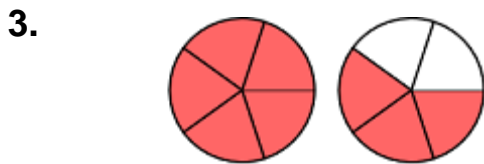
WHOLE OR MIXED FORM TO FRACTION FORM

$$2 \frac{9}{12}$$



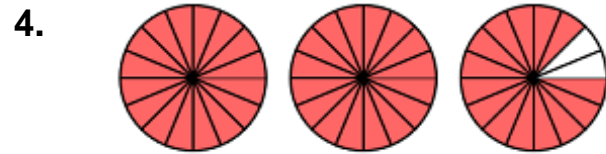
WHOLE OR MIXED FORM TO FRACTION FORM

$$2 \frac{3}{4}$$



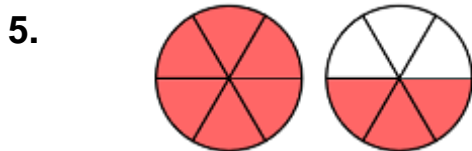
WHOLE OR MIXED FORM TO FRACTION FORM

$$1 \frac{3}{5}$$



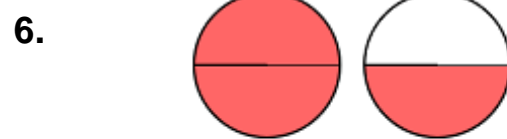
WHOLE OR MIXED FORM TO FRACTION FORM

$$2 \frac{14}{16}$$



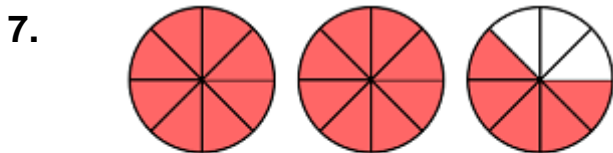
WHOLE OR MIXED FORM TO FRACTION FORM

$$1 \frac{3}{6}$$



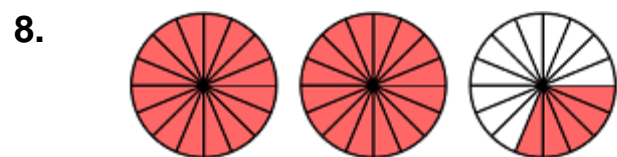
WHOLE OR MIXED FORM TO FRACTION FORM

$$1 \frac{1}{2}$$



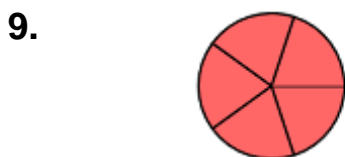
WHOLE OR MIXED FORM TO FRACTION FORM

$$2 \frac{5}{8}$$



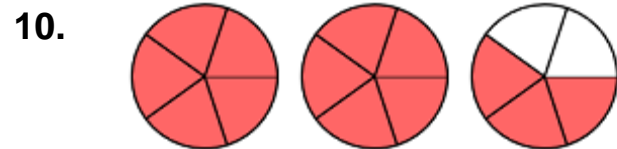
WHOLE OR MIXED FORM TO FRACTION FORM

$$2 \frac{5}{16}$$



WHOLE OR MIXED FORM TO FRACTION FORM

$$1$$



WHOLE OR MIXED FORM TO FRACTION FORM

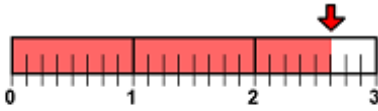
$$2 \frac{3}{5}$$

## 2. Rename Mixed to Fractions with Lines

Name \_\_\_\_\_

Complete the number sentence to show the fraction form from the pictures:

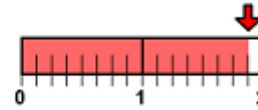
1.



WHOLE OR MIXED FORM TO FRACTION FORM

$$2 \frac{5}{8}$$

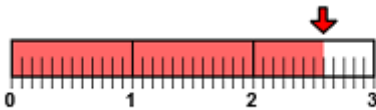
2.



WHOLE OR MIXED FORM TO FRACTION FORM

$$1 \frac{7}{8}$$

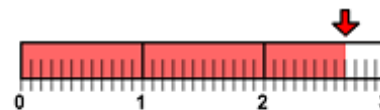
3.



WHOLE OR MIXED FORM TO FRACTION FORM

$$2 \frac{7}{12}$$

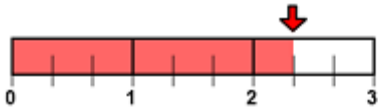
4.



WHOLE OR MIXED FORM TO FRACTION FORM

$$2 \frac{8}{12}$$

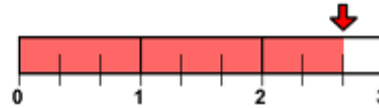
5.



WHOLE OR MIXED FORM TO FRACTION FORM

$$2 \frac{1}{3}$$

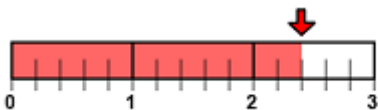
6.



WHOLE OR MIXED FORM TO FRACTION FORM

$$2 \frac{2}{3}$$

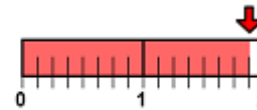
7.



WHOLE OR MIXED FORM TO FRACTION FORM

$$2 \frac{2}{5}$$

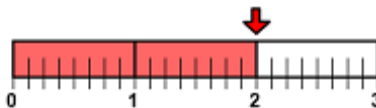
8.



WHOLE OR MIXED FORM TO FRACTION FORM

$$1 \frac{7}{8}$$

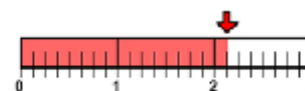
9.



WHOLE OR MIXED FORM TO FRACTION FORM

$$2$$

10.



WHOLE OR MIXED FORM TO FRACTION FORM

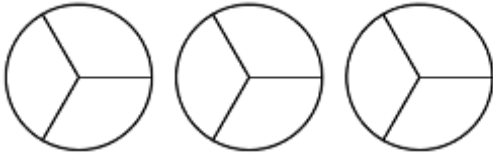
$$2 \frac{1}{8}$$

### 3. Rename Mixed to Fractions with Circles

Name \_\_\_\_\_

Shade the following fractions and complete the number sentences to show the fraction form from each:

1.



WHOLE OR MIXED FORM TO FRACTION FORM

$$2 \frac{1}{3}$$

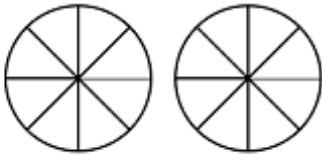
2.



WHOLE OR MIXED FORM TO FRACTION FORM

$$2 \frac{5}{8}$$

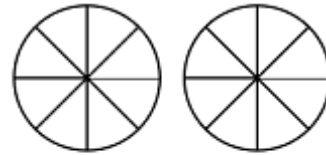
3.



WHOLE OR MIXED FORM TO FRACTION FORM

$$1 \frac{5}{8}$$

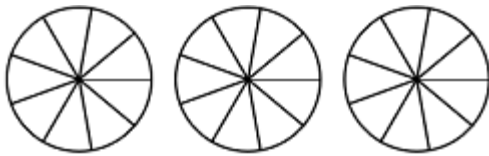
4.



WHOLE OR MIXED FORM TO FRACTION FORM

$$2$$

5.



WHOLE OR MIXED FORM TO FRACTION FORM

$$2 \frac{8}{9}$$

6.



WHOLE OR MIXED FORM TO FRACTION FORM

$$2 \frac{8}{16}$$

7.



WHOLE OR MIXED FORM TO FRACTION FORM

$$2 \frac{9}{10}$$

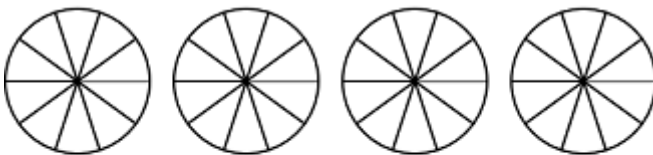
8.



WHOLE OR MIXED FORM TO FRACTION FORM

$$2 \frac{3}{10}$$

9.



WHOLE OR MIXED FORM TO FRACTION FORM

$$3 \frac{3}{10}$$

10.



WHOLE OR MIXED FORM TO FRACTION FORM

$$2 \frac{3}{20}$$

## 4. Rename Mixed to Fractions with Lines

Name \_\_\_\_\_

Shade the following fractions and complete the number sentences to show the fraction form for each:

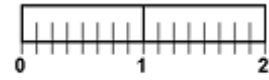
1.



WHOLE OR MIXED FORM TO FRACTION FORM

$$3 \frac{5}{8}$$

2.



WHOLE OR MIXED FORM TO FRACTION FORM

$$1 \frac{7}{8}$$

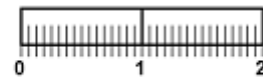
3.



WHOLE OR MIXED FORM TO FRACTION FORM

$$2 \frac{0}{8}$$

4.



WHOLE OR MIXED FORM TO FRACTION FORM

$$1 \frac{15}{16}$$

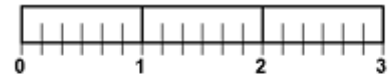
5.



WHOLE OR MIXED FORM TO FRACTION FORM

$$1 \frac{5}{6}$$

6.



WHOLE OR MIXED FORM TO FRACTION FORM

$$2 \frac{3}{6}$$

7.



WHOLE OR MIXED FORM TO FRACTION FORM

$$2 \frac{3}{10}$$

8.



WHOLE OR MIXED FORM TO FRACTION FORM

$$2 \frac{5}{10}$$

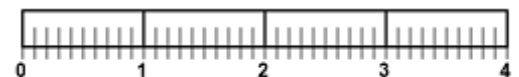
9.



WHOLE OR MIXED FORM TO FRACTION FORM

$$2 \frac{7}{10}$$

10.

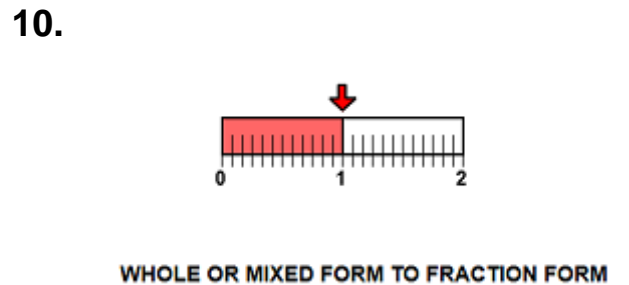
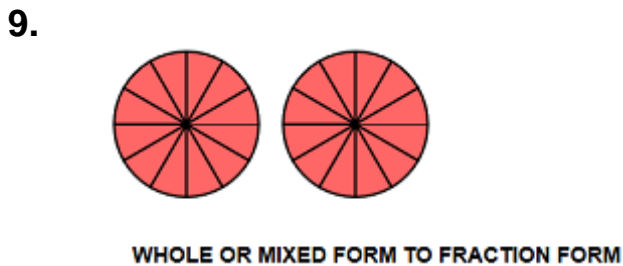
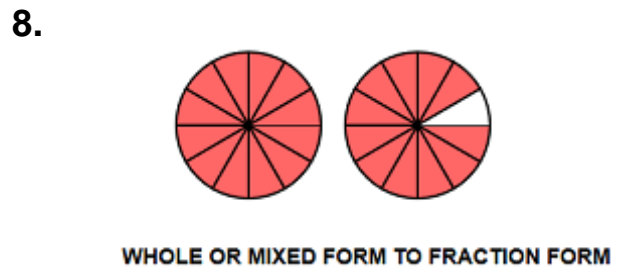
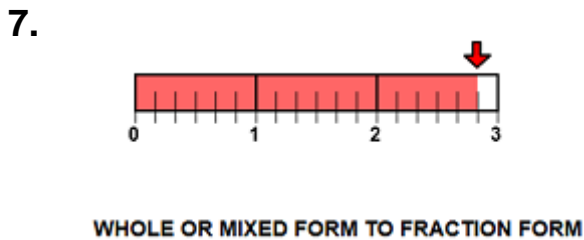
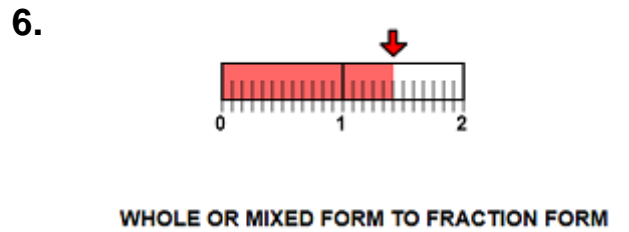
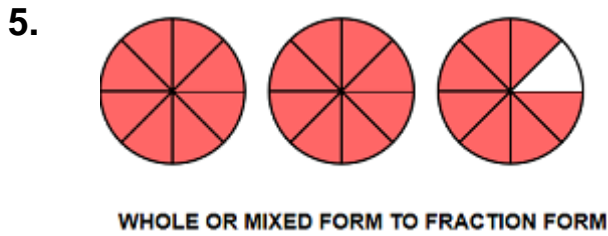
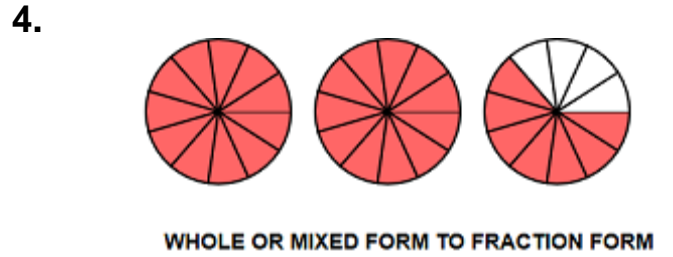
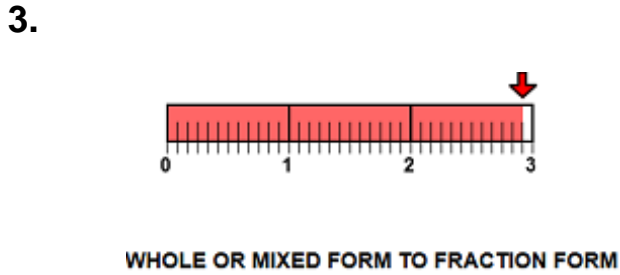
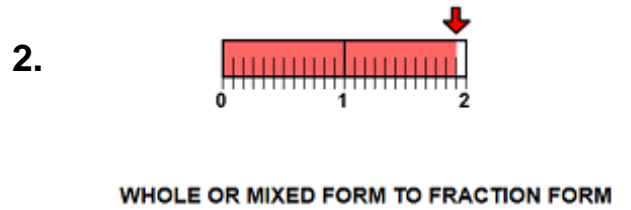
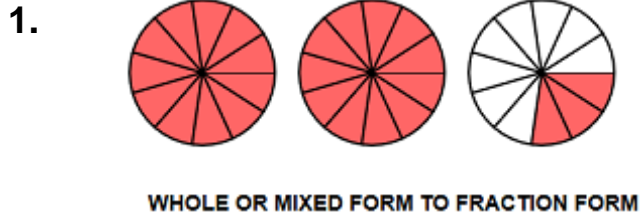


WHOLE OR MIXED FORM TO FRACTION FORM

$$3$$

5. Rename Mixed to Fraction with Circles and Lines Name \_\_\_\_\_

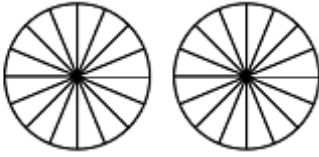
Write a number sentence that shows mixed form to fraction (improper) form from the pictures:



6. Rename Mixed to Fraction with Circles and Lines Name \_\_\_\_\_

Shade the following fractions and complete the number sentences:

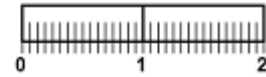
1.



WHOLE OR MIXED FORM TO FRACTION FORM

$$1 \frac{5}{16}$$

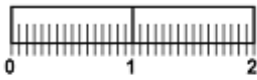
2.



WHOLE OR MIXED FORM TO FRACTION FORM

$$1 \frac{9}{16}$$

3.



WHOLE OR MIXED FORM TO FRACTION FORM

$$1 \frac{8}{16}$$

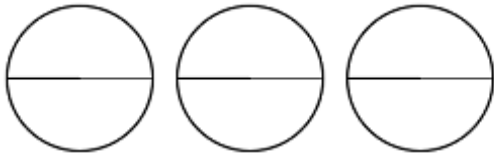
4.



WHOLE OR MIXED FORM TO FRACTION FORM

$$2 \frac{8}{16}$$

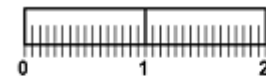
5.



WHOLE OR MIXED FORM TO FRACTION FORM

$$2 \frac{1}{2}$$

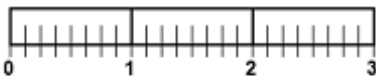
6.



WHOLE OR MIXED FORM TO FRACTION FORM

$$1 \frac{8}{16}$$

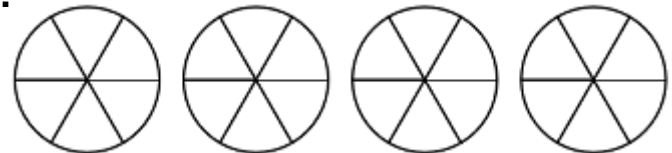
7.



WHOLE OR MIXED FORM TO FRACTION FORM

$$2 \frac{5}{8}$$

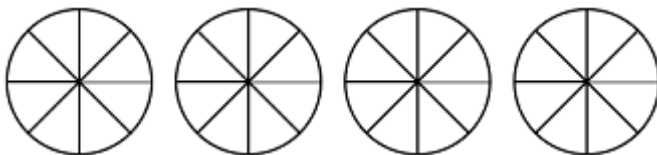
8.



WHOLE OR MIXED FORM TO FRACTION FORM

$$3 \frac{5}{6}$$

9.



WHOLE OR MIXED FORM TO FRACTION FORM

$$3 \frac{5}{8}$$

10.



WHOLE OR MIXED FORM TO FRACTION FORM

$$2 \frac{5}{9}$$

## 7. Rename Mixed to Fraction Practice

Name \_\_\_\_\_

Write the following in fraction form:

1.

Mixed Form

$$2 \frac{5}{6} =$$

Fraction Form

2.

Mixed Form

$$1 \frac{5}{6} =$$

Fraction Form

3.

Mixed Form

$$2 \frac{4}{5} =$$

Fraction Form

4.

Whole Number

$$3 =$$

Fraction Form

$$\frac{18}{6}$$

5.

Mixed Form

$$2 \frac{4}{15} =$$

Fraction Form

6.

Mixed Form

$$2 \frac{14}{15} =$$

Fraction Form

7.

Mixed Form

$$3 \frac{14}{15} =$$

Fraction Form

8.

Mixed Form

$$1 \frac{7}{8} =$$

Fraction Form

9.

Whole Number

$$2 =$$

Fraction Form

10.

Mixed Form

$$2 \frac{1}{8} =$$

Fraction Form

11.

Mixed Form

$$3 \frac{2}{3} =$$

Fraction Form

12.

Mixed Form

$$2 \frac{1}{3} =$$

Fraction Form